



Now, look at these squares. I cut them out of the addition grid to make a puzzle. But then I spilled my *chai* on it - some numbers got washed out. Can you look at the grid and find out the missing numbers in each square?

10		
	12	
		14

		8
	8	
8		

	9	
		11
	11	

12		
		16

9		11

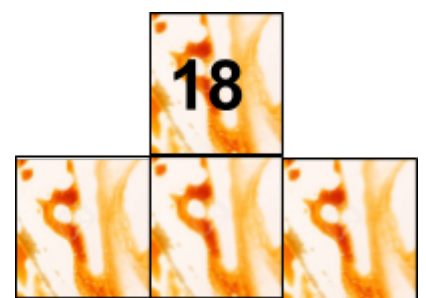
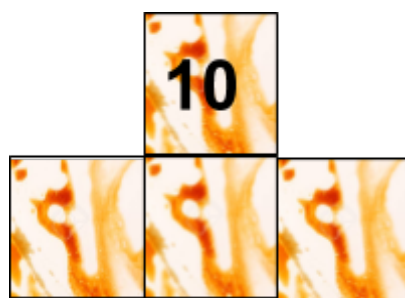

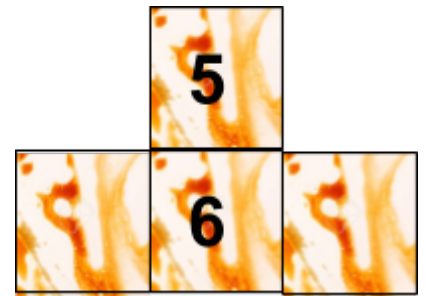
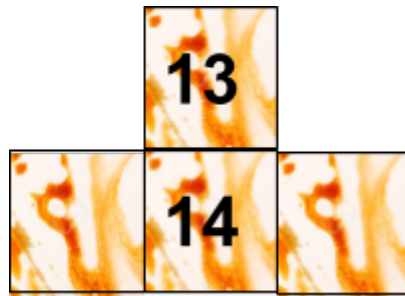
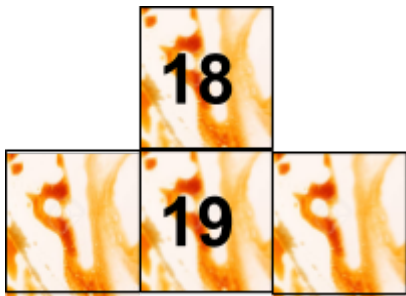
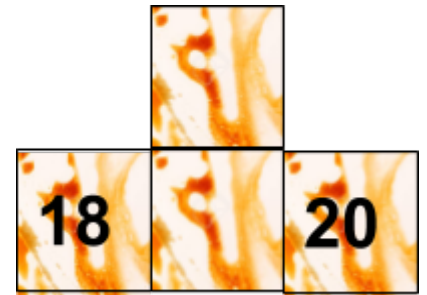
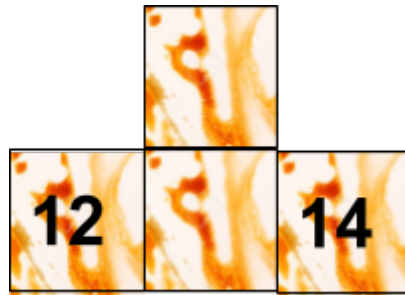
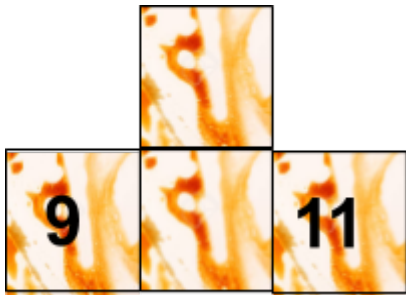
		16
16		

	4	



	17	

	6	

Here are some funny shapes! I cut them out of the addition grid to make a puzzle. But then my pet dog licked off some of the numbers. Can you look at the grid and fill in the missing numbers?



Here are some more funny shapes! I cut them out of the addition grid to make a puzzle. I put them in my pocket. But then I forgot to take them out. The pieces got washed with my *kurta*. Some numbers got erased. Can you look at the grid and fill in the missing numbers?



By now, you know what to do! Fill in the missing numbers in these puzzle pieces that are part of the addition grid. This time, try doing it **WITHOUT** looking at the grid.

